
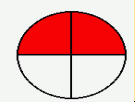
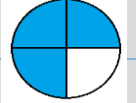
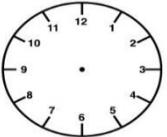
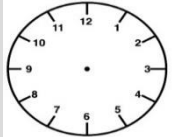
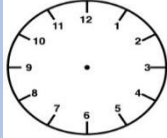
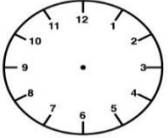
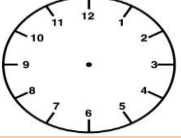
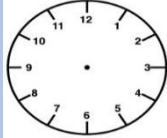
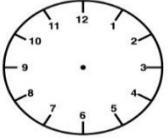
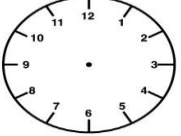


Week Commencing 8th June 2020

| Monday | | |  <p>6 a day challenges</p> | Tuesday | | | | |
|----------------|---------------|--|--|----------------|---|--|---------------|---|
| $42 + 39 =$ | $53 - 25 =$ | What fraction of the shape is shaded?  | | $22 + 57 =$ | $61 - 16 =$ | What fraction of the shape is shaded?  | | |
| $4 \times 3 =$ | $20 \div 5 =$ | Draw half past 1  | | $5 \times 2 =$ | $24 \div 3 =$ | Draw half past 5  | | |
| Wednesday | | | | Thursday | | | Friday | |
| $27 + 27 =$ | $48 - 14 =$ | What is $\frac{2}{3}$ of 24?  | $29 + 38 =$ | $72 - 24 =$ | What is $\frac{3}{4}$ of 16?  | $18 + 34 =$ | $42 - 13 =$ | What is $\frac{1}{3}$ of 15?  |
| $8 \times 3 =$ | $28 \div 2 =$ | Draw quarter past 7  | $9 \times 3 =$ | $35 \div 5 =$ | Draw quarter to 4  | $5 \times 4 =$ | $18 \div 3 =$ | Draw quarter past 3  |